



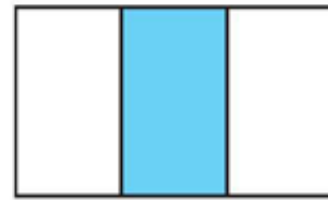

Smallest to Largest

For each set of rectangles below, label the shaded part as a fraction of the rectangle. Then write the fractions in order from smallest to largest.

NOTE Students practice putting unit fractions in order from smallest to largest.

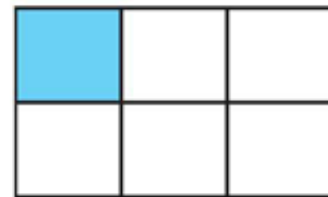
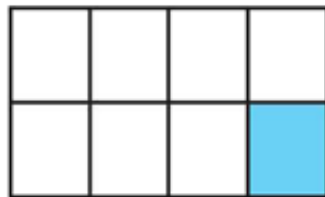
SMH 58–59

Set 1



From smallest to largest: _____

Set 2



From smallest to largest: _____

Choose one of the sets above and tell how you figured out the order from smallest to largest.